



SIMS®

(SCHOLARS INTEGRAL MATHS & SCIENCE OLYMPIADS-HYD)



BIGGEST STATE LEVEL OLYMPIAD : 2025-26

SISO QUESTION PAPER : STAGE - I

MAX. MARKS : 100

TIME: 60 MIN.

NAME OF THE STUDENT :
HALL TICKET NUMBER :
NAME OF THE SCHOOL :

INSTRUCTIONS:

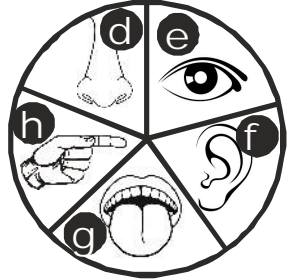
- ✦ This question paper consists of 25 questions.
 - ✦ All questions are single correct answer type.
 - ✦ Each question carries 4 marks and no negative marks.
 - ✦ Check whether 25 questions printed or not.
 - ✦ Read the instructions carefully given on the OMR sheet.
 - ✦ Hand over OMR Sheet before leaving the exam hall.
 - ✦ Retain Question paper with you.
-

Single Correct Answer Type : 25 × 4 = 100M

1. **Hot, Cold, Soft, Smooth, Rough, Hard**

The above words are associated with which of the given senses?

- 1) d and e
- 2) e and g
- 3) h only
- 4) h, e and f



2. **Plants give us foodgrains. What are the examples of such grains?**

- 1) Wheat and Rice
- 2) Maize and Barley
- 3) Gram and Pulses
- 4) All of these

I am a stem
I give sweet juice.

3. **Who am I?**

- 1) Eucalyptus
- 2) Sunflower
- 3) Sugarcane
- 4) Sundew

4. **Which of these animals can live with people after being trained?**



5. All of the following live in nest except.

- 1) Bat 2) Crow 3) Pigeon 4) Sparrow

6. A new born baby will have _____ bones.

- 1) 230 2) 300 3) 150 4) 450

7. Select the odd one out, based on the edible part.





8. What gives support and shape to our body?

- 1) Joints 2) Skeleton
3) Skin 4) Posture

9. Select the correct option about eatables which can form main meals of a day.

- 1) Breakfast - Milk and lemon juice
2) Lunch - Rice, Vegetable curry and curd
3) Evening snacks - Cornflakes, Sweets and Cold drink
4) Supper - ice, fruit and cucumber salad

10. In which of the following activities bones and muscles are being least used?



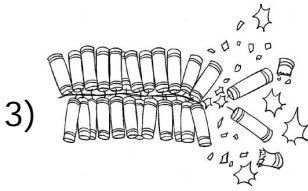
11. Why do people put wiremesh on their doors and windows?

- 1) It allows sunlight and air to come in
- 2) It keeps the house warm and dark
- 3) It stops the entry of mosquitoes and flies
- 4) Both (1) and (3)

12. Janamasthmi celebrates the birth of _____.

- | | |
|-----------------|------------------|
| 1) Lord Krishna | 2) Lord Rama |
| 3) Lord Shiva | 4) Goddess Durga |

13. Hearing disability may happen due to which of these?



4) All of these

14. Which of these festivals is celebrated by Christians?

1) Easter

2) Good Friday

3) Christmas

4) All of these

15. Which of the following is a correct match?

1) Christmas - Crackers

2) Diwali - Lakshmi pooja

3) Guruparva - Santa Claus

4) Dussehra - Colour

16. The man in the figure is a/an _____.

1) Astronaut

2) Sea diver

3) Fire - man

4) Pilot



17. _____ is the immediate help given to a person who is hurt, before the doctor comes.

- 1) Critical Aid 2) First Aid
3) Medical treatment 4) Intensive treatment

18. The body part which helps Binny to lift a bag will also help her to ____ .


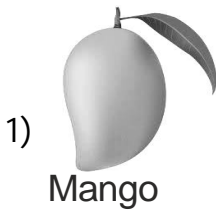
- 1) Throw
2) Jump
3) Hop
4) Kick



19. Which of the following we should do with the help of our parents?

- 1) Cutting nails 2) Using scissor
3) Learning swimming 4) All of these

20. Which of these is used in making Indian beverages?



4) All of these

21. Sleeping is the best way of taking rest. How many hours should we sleep everyday?

- 1) 4 - 5 hours
- 2) 8 - 9 hours
- 3) 11 - 12 hours
- 4) 12 - 14 hours

22. Woollen socks, Gloves and caps are made from wooll. These are obtained from ____.

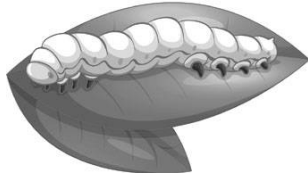
1)



2)



3)





4)



23. Who is a carpenter?

- 1) One who paints the house
- 2) One who paints the car
- 3) One who drives the bus
- 4) One who makes the furniture

24. The musicians do not use which of the following items?




25. Match Column - I with Column - II and select the correct option.

Column - I

Column - II



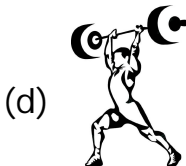
1) Swimming



2) Playing Hockey



3) Weight lifting



4) Cycling

1) a-3, b-2, c-1, d-4

2) a-2, b-1, c-4, d-3

3) a-3, b-4, c-1, d-2

4) a-2, b-4, c-1, d-3

❖❖❖ ALL THE BEST ❖❖❖