



**S I M S**<sup>®</sup>

(SCHOLARS INTEGRAL MATHS & SCIENCE OLYMPIADS)



**BIGGEST NATIONAL LEVEL OLYMPIADS (STAGE - II) : 2025-26**

**MAX. MARKS : 100**

**SISO QUESTION PAPER**

**TIME: 60 MIN.**

NAME OF THE STUDENT : .....

HALL TICKET NUMBER : .....

NAME OF THE SCHOOL : .....

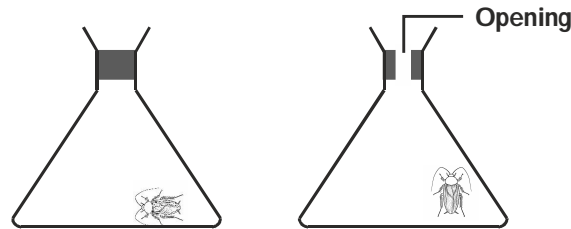
**INSTRUCTIONS:**

- ✦ This question paper contains 25 questions.
  - ✦ All questions are single correct answer type.
  - ✦ Each question carries 4 marks.
  - ✦ No negative marks.
  - ✦ Check whether 25 questions printed or not.
  - ✦ Read the instructions carefully given on the OMR sheet.
  - ✦ Hand over OMR Sheet to the invigilator before leaving the exam hall.
  - ✦ Retain Question paper with you.
  - ✦ Results will be available at [www.simsolympiad.org](http://www.simsolympiad.org) .
  - ✦ One copy of branch results will be sent to the concerned school mail id.
-

**Single Correct Answer Type :**

25 × 4 = 100M





1. Refer to the given experiment. Cockroach 1 died before cockroach 2. What was the most likely reason?



Cockroach 1

Cockroach 2

- 1) It did not get air  
 2) It did not have food  
 3) It did not have water  
 4) It did not have both food and water
2. Select the ODD ONE on the basis of habitat.



3. We get \_\_\_\_\_ fibre from the animal shown here.




- 1) Woollen                      2) Cotton                      3) Silk                      4) Nylon
4. Suman describes a plant that he has seen in a field. I identify the plant.

It is a small bushy plant with hard stem and branches. We get soft fibre from it which is used for stuffing pillows.



Suman

- 1) Jute plant                      2) Cotton plant                      3) Coconut plant                      4) Money plant
5. What will happen to a plant if we remove all the leaves from it ?
- 1) It will stop making food.  
 2) It cannot stand upright on the ground  
 3) It will stop transporting food and water to all the parts  
 4) It will stop absorbing nutrients and water from the soil

6.  I love shining raindrops on leaves.

Refer to what Rani is saying. Which sense organ has she used for that?

- 1)       2)       3)       4) 

7. Match Column-I with Column-II and select the correct option.

Column-I

- a) Camel
- b) Elephant
- c) Lion

Column-II

- p) King of the jungle
- q) Largest land animal
- r) Ship of the desert

- 1) a-r, b-q, c-p      2) a-p, b-r, c-q      3) a-q, b-r, c-p      4) a-p, b-q, c-r

8. Select the clothing item that is made from the fibre whose name will be obtained by unscrambling the letters given in the box

I L S K

- 1)       2)       3)       4) 

9. Which of the following correctly shows the path that air takes in our body as we breathe in ?

- 1) Nose → Gullet → Lungs      2) Mouth → Gullet → Heart  
 3) Nose → Windpipe → Lungs      4) Lungs → Windpipe → Nose

10. The given picture shows which occasion in the family ?




- 1) Birthday celebration      2) Anniversary  
 3) Wedding      4) Housewarming party

11. Always walk on the \_\_\_\_\_ and cross the road at a \_\_\_\_\_ if there is one.

- 1) Road, Zebra crossing
- 2) Zebra crossing, Footpath
- 3) Footpath, Subway
- 4) Road, Footpath

12. Which of these shows your contribution as a helping hand in your family ?

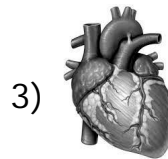
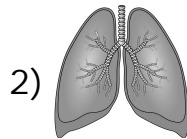
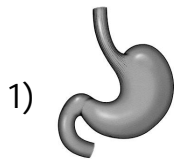


4) All of these

13. We should never play with \_\_\_\_\_.

- 1) Matchbox and matchstick
- 2) Football
- 3) Blade
- 4) Both (1) & (3)

14. I am a soft organ inside your chest. If I stop working other parts of your body will not get blood. Who am I ?



4) None

15. Ashok go to the school on a bicycle. Which of these safety rules should he follow ?

- 1) He should keep to the right of the road
- 2) He should give signals before taking turns
- 3) He should cross the road by using zebra crossing
- 4) All of these

16. Select the food item that is good for our health.



17. Ramesh takes healthy diet daily still he falls ill frequently. What could be the reason for it ?





- 1) He does not comb his hair daily
- 2) He does not trim his nails regularly
- 3) He does not wash his hands properly before eating
- 4) Both (2) and (3)

18. The items shown in the box are \_\_\_\_\_.



- 1) Energy giving food
- 2) Body building food
- 3) Protective food
- 4) All of these

19. According to the weather forecast in Delhi given below, which of these one should wear or carry on 3rd July 20XX in case one goes out ?

1st July 20XX	2nd July 20XX	3rd July 20XX	4th July 20XX
			
Sunny	Cloudy	Rainy	Cloudy

- 1) Raincoat
- 2) Woolen socks
- 3) Silk scarf
- 4) Woollen cap

20. It is not a good habit to \_\_\_\_\_.


- 1) Throw waste into the dustbin
- 2) Put clean water for birds to drink
- 3) Waste food by taking excess food than needed
- 4) Keep food covered

21. The road sign shown here means that a/an \_\_\_\_\_ is nearby.



- 1) Hospital
- 2) School
- 3) Bus stop
- 4) Airport

22. Using which of the given means of transport we can travel maximum distance in a minimum time ?



23. Which among the following is the hardest mineral?

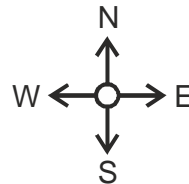

1) Graphite

2) Diamond

3) Quartz

4) Talc

24 The windsock shown in the picture indicates that the wind is moving towards \_\_\_\_\_.



1) North

2) South

3) West

4) East

25. Which of the following are liquid states of water?

a) Water vapour

b) Rain

c) Snow

d) Dew

1) (b) and (c)

2) (b) and (d)

3) (b), (c) and (d)

4) (1), (b), (c) and (d)

❖❖❖ ALL THE BEST ❖❖❖