



SIMS[®]

(SCHOLARS INTEGRAL MATHS & SCIENCE OLYMPIADS-HYD)



BIGGEST STATE LEVEL OLYMPIAD : 2025-26

SISO QUESTION PAPER : STAGE - I

MAX. MARKS : 100

TIME: 60 MIN.


NAME OF THE STUDENT :
HALL TICKET NUMBER :
NAME OF THE SCHOOL :

INSTRUCTIONS:

- ✦ This question paper consists of 25 questions.
- ✦ All questions are single correct answer type.
- ✦ Each question carries 4 marks and no negative marks.
- ✦ Check whether 25 questions printed or not.
- ✦ Read the instructions carefully given on the OMR sheet.
- ✦ Hand over OMR Sheet before leaving the exam hall.
- ✦ Retain Question paper with you.

Single Correct Answer Type : 25 × 4 = 100M

1. Cooking oil is obtained from _____.



4) All of these

2. What do plants need to grow ?

1) Air

2) Water

3) Sunlight

4) All of these

3. Which among these animals lives on land and eats grains?

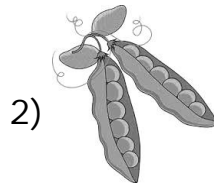
1) Pigeon

2) Hen

3) Crow

4) Frog

4. Which of these we get from climbers?



5. I have yellow and brown stripes on my body. I am the National Animal of India. Who am I?

1) Lion


2) Cheetah

3) Tiger




4) Zebra

6. Which sense organs is the child using here?

- 1) Nose
- 2) Tongue
- 3) Skin
- 4) Ears



7. Which child may get an electric shock?



8. Our house keeps us safe from _____.

- 1) Heat, cold and family
- 2) Rain, winds and food
- 3) Heat, cold and rain
- 4) Cold, winds and school

9.  helps us in _____.



- 1) Drawing a sketch
- 2) Gripping the swing tightly
- 3) Feeling different things
- 4) All of these

10. For which part of the body is the given item used?

- 1) Eyes
- 2) Nose
- 3) Ear
- 4) Head



11. Which of these is NOT a good toilet habit?



4) All of these

12. Match the columns and select the correct option.

Column - I

Column - II

- (a) Eyes
- (b) Ears
- (c) Nose

- 1. Hearing
- 2. Smelling
- 3. Seeing



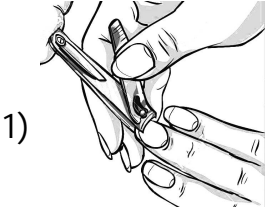
1) a-3, b-1, c-2

2) a-1, b-2, c-3

3) a-1, b-3, c-2

4) a-3, b-1, c-2




13. Which of the following we should do twice a day?



14. On road always walk _____.

- 1) On your left side 2) On your right side
 3) Anywhere you want 4) Cannot say


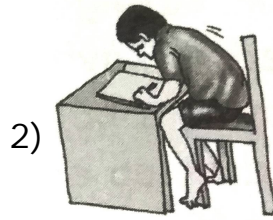
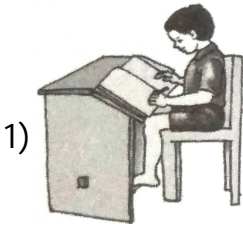
15. Which of these animals does NOT lay eggs?



16. During the rainy season, rainwater is filled in _____.

- 1) Rivers
- 2) Lakes
- 3) Wells
- 4) All of these

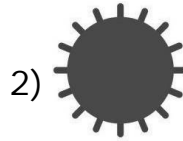
17. Which among these children is keeping the correct posture?



18. For lighting a  we need _____.

- 1) Water
- 2) Food
- 3) Air
- 4) All of these

19. Among which of these days you would most likely see rainbow in the sky?



20. Match the columns and select the correct option.

Column - I

Column - II

(a) Sun

1) No light of its own

(b) Moon

2) Seem to twinkle in the sky

(c) Stars

3) Gives light and warmth

1) a-2, b-1, c-3

2) a-3, b-1, c-2

3) a-1, b-2, c-3

4) a-3, b-2, c-1

21. In cold days, we would like to sit near ____.

