



# SIMS<sup>®</sup>

(SCHOLARS INTEGRAL MATHS & SCIENCE OLYMPIADS)



**BIGGEST NATIONAL LEVEL OLYMPIADS (STAGE - II) : 2025-26**

**MAX. MARKS : 100**

**SISO QUESTION PAPER**

**TIME: 60 MIN.**

NAME OF THE STUDENT : .....  
HALL TICKET NUMBER : .....  
NAME OF THE SCHOOL : .....



**INSTRUCTIONS:**

- ✦ This question paper contains 25 questions.
- ✦ All questions are single correct answer type.
- ✦ Each question carries 4 marks.
- ✦ No negative marks.
- ✦ Check whether 25 questions printed or not.
- ✦ Read the instructions carefully given on the OMR sheet.
- ✦ Hand over OMR Sheet to the invigilator before leaving the exam hall.
- ✦ Retain Question paper with you.
- ✦ Results will be available at [www.simsolympiad.org](http://www.simsolympiad.org) .
- ✦ One copy of branch results will be sent to the concerned school mail id.

**Single Correct Answer Type :**

**25 × 4 = 100M**

1. Which of the following is a living thing ?



2. Most of the living things need \_\_\_\_\_ to stay alive.

- a) Air                      b) Sunlight                      c) Food                      d) Water

- 1) (a) and (b)              2) (a), (c) and (d)              3) (a) (b) and (c)              4) (a), (b), (c) and (d)

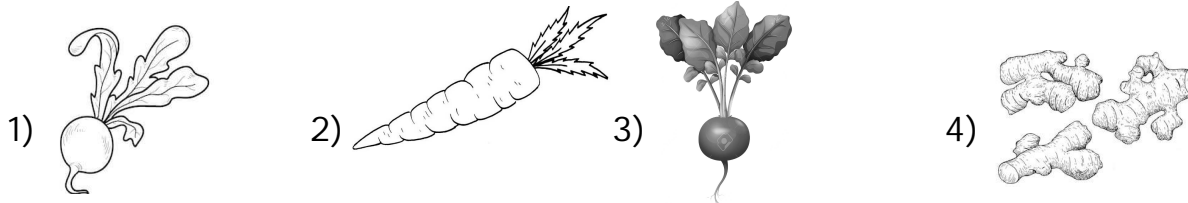
3. Living things reproduce so that \_\_\_\_\_.

- 1) They cannot be eaten up by animals
- 2) They will always be living things of their own kind
- 3) They will decrease in number
- 4) They will not have to fight for food

4. Horse lives in \_\_\_\_\_.

- 1) Shead
- 2) Kennel
- 3) Stable
- 4) Den

5. Which of the following is a stem part of the plant?




6. \_\_\_\_\_ is an underground source of water.

- 1) River
- 2) Pond
- 3) Well
- 4) Dam

7. In the winter season, we should \_\_\_\_\_.

- 1) Wear woollen clothes
- 2) Eat icecreams daily
- 3) Always keep an umbrella with us
- 4) Use air conditioners and coolers

8. \_\_\_\_\_ is an example of pulses.



9. Match the columns and select the correct option.

Column - I

- a) Sun
- b) Moon
- c) Stars

- 1) a-p, b-q, c-r
- 2) a-r, b-p, c-q

Column - II

- p) Changes shape
- q) Seem to twinkle
- r) Source of heat for us

- 3) a-p, b-r, c-q
- 4) a-r, b-q, c-p

10. We eat the seeds of \_\_\_\_\_.



11. Match the columns and select the correct option.

Column - I

- a) Cotton
- b) Jute
- c) Sugarcane




- 1) a-r, b-q, c-p
- 2) a-p, b-q, c-r

Column - II

- p) Sugar
- q) Bags
- r) Clothes

- 3) a-p, b-r, c-q
- 4) a-r, b-p, c-q

12. Select the animal whose young one is called 'CALF'.




13. Which of the following is NOT a religious festival?

- 1) Eid                      2) Gandhi Jayanti      3) Diwali                      4) Christmas

14. Given figure shows parts of a human body. Select the option that correctly identifies the parts P, Q and R.

- |         |       |      |  |
|---------|-------|------|--|
| P       | Q     | R    |  |
| 1) Head | Eye   | Arm  |  |
| 2) Head | Nose  | Leg  |  |
| 3) Neck | Ear   | Foot |  |
| 4) Neck | Cheek | Hand |  |

15. Which among these animals can live both in water and on land ?




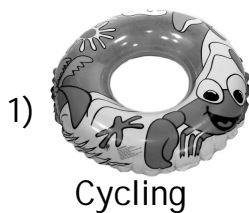
4) All of these

16. \_\_\_\_\_ is a sense organ that is NOT needed in the given activity.



- 1) Eye                      2) Ear                      3) Nose                      4) None of these

17. Which of the following is a correct pair ?






4) None of these

18. Which of these plants has no strong stem ?

- 1) Bitter gourd      2) Pea                      3) Grapes                      4) All of these

19. Ravi falls ill very frequently. He should take more of \_\_\_\_\_ in his diet.



20. Which of these animals has no legs ?


1) Ant

2) Butterfly

3) Earthworm

4) Lizard

21. What is X in the given figure ?



1) Air

2) Steam

3) Water droplets

4) Breeze

22.  are filled with.

1) Water

2) Oil

3) Air

4) Sand

23. We need water to \_\_\_\_\_.

1) Cook food

2) Wash clothes

3) Mop floors

4) All of these

24. Refer to the picture shown here. Raju should go to the \_\_\_\_\_.



1) Bank

2) Post office

3) Hospital

4) Library

25. The things given below are placed in a \_\_\_\_\_.



1) Safety box

2) Pencil box

3) Firstaid box

4) Match box

❖❖❖ ALL THE BEST ❖❖❖