



S I M S[®]

(SCHOLARS INTEGRAL MATHS & SCIENCE OLYMPIADS)



BIGGEST NATIONAL LEVEL OLYMPIADS (STAGE - II) : 2025-26

MAX. MARKS : 100 SIMO QUESTION PAPER TIME: 60 MIN.

NAME OF THE STUDENT	:
HALL TICKET NUMBER	:
NAME OF THE SCHOOL	:


INSTRUCTIONS:

- ✦ This question paper consists of 25 questions.
- ✦ All questions are single correct answer type.
- ✦ Each question carries 4 marks and no negative marks.
- ✦ Check whether 25 questions printed or not.
- ✦ Read the instructions carefully given on the OMR sheet.
- ✦ Hand over OMR Sheet before leaving the exam hall.
- ✦ Retain Question paper with you.

Single Correct Answer Type:


25 × 4 = 100

1. Choose the correct number of the given objects ?



- 1) 6 2) 12 3) 15 4) 18

2. Which cat is 4th from the right ?



- 1) O 2) U 3) R 4) F

3. I have 3 sweets. Mano gave me 4 more. Tency gave me 2 more. How many sweets I have altogether ?

- 1) 7 2) 8 3) 9 4) 10

4. Which of the following is matched correctly ?

- 1)

4	fifth
---	-------

 2)

9	ninth
---	-------

 3)

6	seventh
---	---------


 4)

8	fourth
---	--------

5. 1 ten 4 ones - 1 ten 2 ones = _____ ones.

- 1) 10 2) 11 3) 12 4) 2

6. Which number is in between 35 and 37 ?




- 1) 38 2) 34 3) 36 4) 40

7. Which is the correct ascending order ?

- 1) 2) 3) 4)

8. Which is the largest number in the given numbers ?



- 1) 96 2) 55 3) 99 4) 96

9. Which one of the following month has 31 days ?

- 1) February 2) June 3) August 4) September

10. $35 + 12$ is shown correctly by which abacus below ?

- 1) 2) 3) 4)

11. Look at the grid given. Numbers are added across and down.

	+ →		
+	5	4	9
+	6	3	9
↓	11	?	18


Which number must be replaced in the circle ?

- 1) 9 2) 7 3) 4 4) 5

12. 4 books are kept on a table. Two of them fell down from the table, now there are 2 books left on the table. This is a problem of _____.

- 1) Subtraction 2) Addition 3) Counting 4) None of these

13. The picture below is described correctly by _____.



- 1) 10 - 6 2) 7 + 7 3) 13 + 6 4) 13 - 5

14. Which abacus shows $47 - 32 = 15$?



15. Which number come in the place of 'D' ?



- 1) 14 2) 13 3) 12 4) 11

16. Find the missing numbers.

3	5	7		11	13		17
---	---	---	--	----	----	--	----

- 1) 9, 15 2) 15, 9 3) 15, 13 4) 11, 13

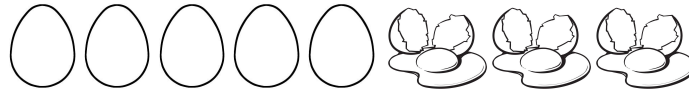
17. This is Riya's working, which is wrong.

$$\text{Apple} \begin{matrix} \text{48} \end{matrix} + \text{Apple} \begin{matrix} \text{34} \end{matrix} = \text{Apple} \begin{matrix} \text{52} \end{matrix}$$

What is the correct difference ?

- 1) 2) 3) 4)

18. Rishi bought 8 eggs. If 3 eggs spoiled, then how many eggs left ?



- 1) 4 2) 5 3) 6 4) 7

19. The largest two digit number is _____.

- 1)

0	1
---	---

 2)

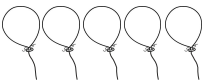
1	0	0
---	---	---

 3)

9	0
---	---

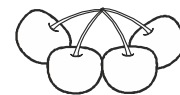
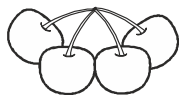
 4)

9	9
---	---

20. Mano has  balloons. Out of which 2 are burst. How many balloons are left?

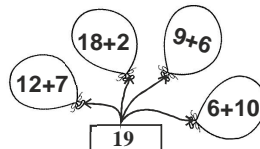
- 1) 3 2) 2 3) 1 4) 0

21. Anitha has some cherries as shown in below. How many cherries are there altogether ?






- 1) 15 2) 12 3) 14 4) 16

22. Choose the balloon which gives the correct sum.



- 1) 12 + 7 2) 18+2 3) 9+6 4) 6+10

23. Which of the following is true ?

- 1)  2) 
- 3)  4) None of these

24. Which of the following candles will give you the largest sum ?

- 1)  2)  3)  4) 

25. If  means 5 and  means 2 find the value of  +  +  +  ?

- 1) 13 2) 14 3) 15 4) 16

*** ALL THE BEST ***